

University of Palestine
Faculty of Applied Engineering and Urban Planning

Course Name	Planning & Islamic architecture			Course No.	ARC 2206
Academic Year	2018/2019	Semester	2 nd	Exam Type	Final Exam
Exam Date	27/5/2019		Exam Time	9:00-11:00	

اسم الطالب (بالعربي):		الرقم الجامعي:	
اسم المدرس: د. أيمن محمد حسونة	رقم الشعبة: 101	وقت المحاضرة: 8-9	الرقم المتسلسل:

Important Instructions

- *This is a closed-book exam; all related material must be placed away from your desk.*
- *Cell phone use is prohibited for any purpose: Your cell phone must be turned off and placed off of the desk. Cell phones may not be accessed during the exam. Failure to comply may be treated as a violation of the Honor Code.*
- *Headphones of any kind are not permitted.*
- *This exam is 120 minutes long.*
- *Make sure that you have 6 pages including this page.*
- *This exam has 4 essay questions. Read each question carefully before answering.*
- *Calculators can be used but cannot be shared.*
- *When you finish, you must:*
 - *Check that you have written your information in the spaces provided.*
 - *Give the exam package (all papers) to the proctor before you leave.*

For Teacher's Use Only For Proctor's Remarks

QN	KPI/ILO	SO	DL	Mark	Weight
1	B1	A	2		10
2	B1	B	4		10
3	B1	B,J	5		16
4	B2	C	3		14
Total					50

1st question: Briefly define the below Islamic architecture terms (10 marks)

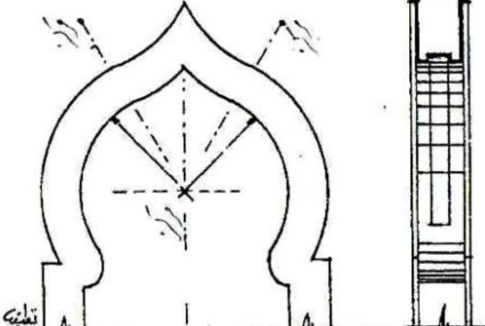
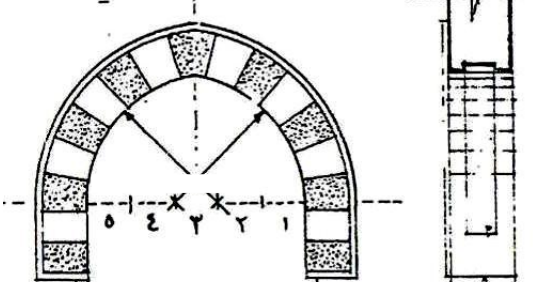

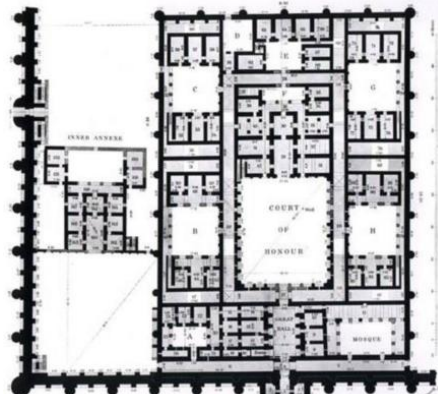
- 1- AMashrabiya.....
.....
.....
- 2- Khanqah.....
.....
.....
- 3- Bulbous Arch
.....
.....
.....
- 4- Bimaristan.....
.....
.....
- 5- Iwan.....
.....
.....
- 6- courtyard:.....
.....
.....
- 7- -cross vault:
.....
.....
- 8- barrel vault:
.....
.....
- 9- Pulpits:
.....
.....
- 10- Poly lobed – arches
.....
.....

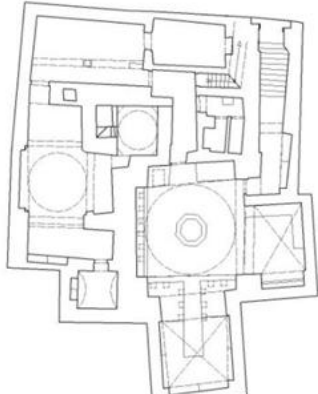
2nd question : (10 marks)
Q2A) Explain the most five important of architectural elements that appear in the architecture of Islamic house? (5 Marks)


.....
.....
.....
.....
.....
.....
.....
.....
.....
.....
.....


3rd question: Describe as required


(16marks)

	<p>Arch Type:</p> <p>Architecture description:</p>
	<p>Arch Type:</p> <p>Architecture description:</p>
	<p>Architectural style</p> <p>Architecture description</p>
	<p>Architectural style:</p> <p>Architecture description:</p>

	<p>The name of the building:</p> <p>Architecture description:</p>
---	--

	<p>System of columns</p> <p>Types of Arches</p>
--	--

	<p>Types of Arches</p> <p>Decoration :</p>
---	---

	<p>Architecture style:</p> <p>Entrance decoration:</p>
---	---

4th question(14 marks): 4A-), Describe the architectural terms which shown in the number at the picture: (5 marks)



- 1)..... 2).....
-
- 3)..... 4).....
-
- 5).....
-

4rd question: 4B) List The main Islamic columns type (9 marks)

.....
.....
.....
.....
.....
.....
.....
.....
.....
.....
.....
.....
.....
.....
.....
.....