



اجب عن جميع الأسئلة على ورقة الأسئلة

**1<sup>st</sup> question: Choose the right answer**

(10 marks)

- A) Choose the right answer (5 marks)
- 1) **Architecture that follows Islamic faith would be**
    - a) A classification concerned with the design of mosque topologies
    - b) buildings of a traditional style of the Muslims
    - c) a focus on the interior ignoring the exterior
    - d) involves in its design key elements, like keel arches, arcades or arcaded courtyards
    - e) all options
  - 2) **The basic decoration in Islamic art involves**
    - a) Calligraphy
    - b) Islimi and Calligraphy
    - c) Muqarnas-stalactite vault, Persian architectural ornament
    - d) Geometry, calligraphy and Islimi
    - e) none of the above
  - 3) **The Umayyad style of architecture contributed through**
    - a) The use of hypostyle hall and also the adoption of four-minaret arrangement and geometrically-patterned marble, for example
    - b) baked or fired brick and gypsum mortar
    - c) a triple-arcaded prayer hall
    - d) a double-tiered arcades
    - e) none of the options
  - 4) **The structural system being used for the Great Mosque of Damascus is**
    - a) Shoulders, beams and pillars
    - b) Cross vault and tunnel vaulting
    - c) double-tiered arcades
    - d) flat uniform pattering
    - e) all options
  - 5) **The key characteristics to Abbasside architecture lie in**
    - a) The emergence of monumental architecture
    - b) the architecture plans of stereo-graphic projection
    - c) the fundamental principles inherited in the city planning
    - d) rather fresh structure system, including beams and shoulders
    - e) bright colors, cladding materials, enclosed zones, beams, pillars and shoulders and using bricks

B) Briefly define the below terms (5 marks)

**Monumental architecture**

---

---

---

---

---



Course No: ARCH 2206  
Course Title: Islamic architecture  
Date: 13.3.2018  
No. of Questions: (2)  
Time: 1 hour

1st Midterm Exam  
2<sup>nd</sup> term  
2018  
Total: 15%

Instructor: \_\_\_\_\_  
Student No: \_\_\_\_\_  
Student Name: \_\_\_\_\_  
College Name: Engineering  
Dep. / Specialist: Architecture

**The key aspects to the planning of round city of Bagdad**

---

---

---

---

---

**Squinches and shallow vaults**

---

---

---

---

---

**A shallow arch**

---

---

---

---

---

**the caldarium Dome**

---

---

---

---

---

---




Course No: ARCH 2206  
Course Title: Islamic architecture  
Date: 13.3.2018  
No. of Questions: (2)  
Time: 1 hour

1st Midterm Exam  
2<sup>nd</sup> term  
2018  
Total: 15%

Instructor: \_\_\_\_\_  
Student No: \_\_\_\_\_  
Student Name: \_\_\_\_\_  
College Name: Engineering  
Dep. / Specialist: Architecture

**2<sup>nd</sup> question: Describe the below figures as required (5 marks)**



**The adoption to climate**

**Structural system**



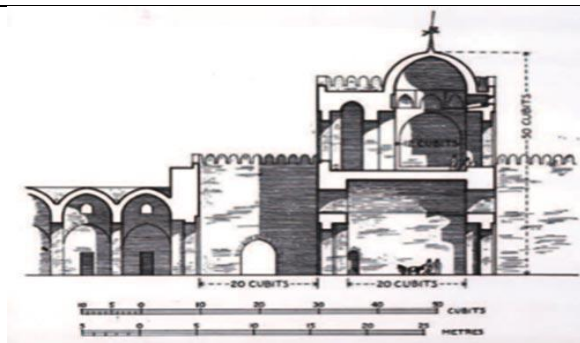
**Architecture style**

**Key architecture elements:**



**Architecture style**

**Decoration pattern**



**Structural system**

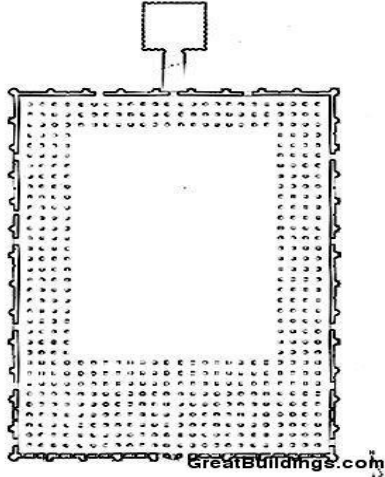

**Architecture characteristics:**



Course No: ARCH 2206  
Course Title: Islamic architecture  
Date: 13.3.2018  
No. of Questions: (2)  
Time: 1 hour

1st Midterm Exam  
2<sup>nd</sup> term  
2018  
Total: 15%

Instructor: \_\_\_\_\_  
Student No: \_\_\_\_\_  
Student Name: \_\_\_\_\_  
College Name: Engineering  
Dep. / Specialist: Architecture

 <p>Architecture style</p> <p>Key architecture characteristics:</p>	 <p>Architecture construction</p> <p>Decoration pattern</p>
--	---

Good Luck  
End of questions