

Course No: ECGD2204  
Course Title: CAD For Civil  
Date: 3 / 4 / 2012  
No. of Questions: 1  
Time: 20 min  
Using Calculator (Yes)

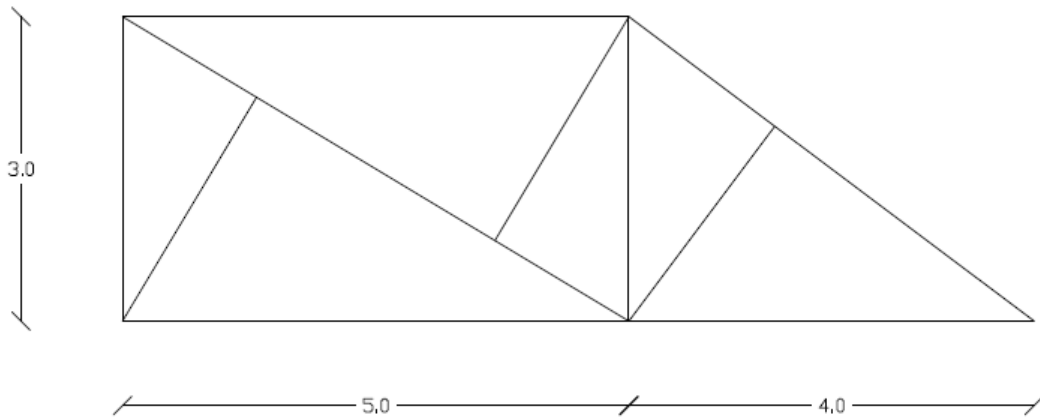
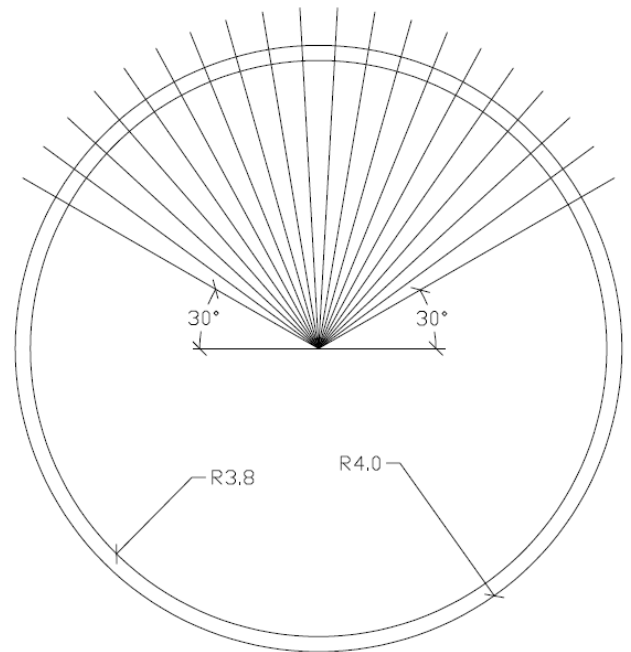
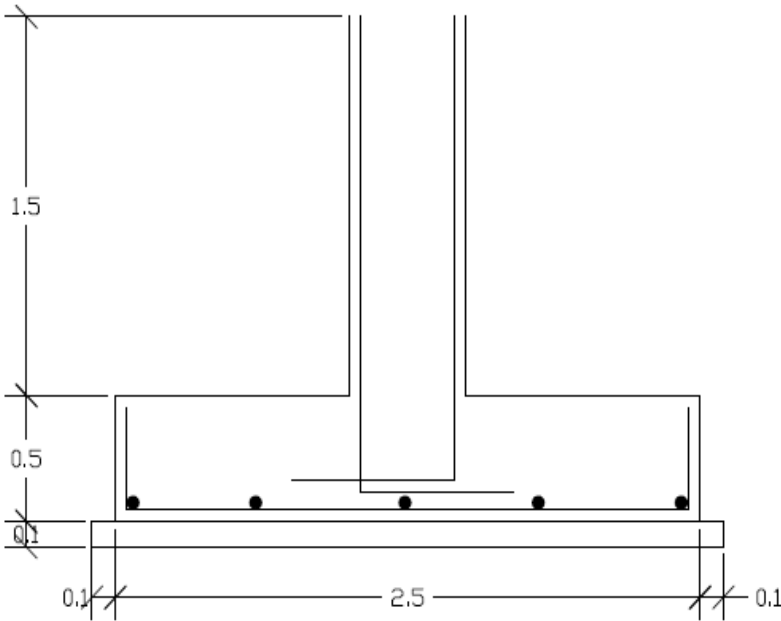
University of Palestine



midterm Exam  
Second term 2012  
Total Grade: 20

Instructor: Eng. Heba Hamad  
Student No.: \_\_\_\_\_  
Student Name: \_\_\_\_\_  
College Name: College of Applied  
Engineering  
Dep. / Specialist:  
Using Dictionary (No)

Draw all the following drawings (without dimensions):



Perpendicular lines

بِسْمِ اللَّهِ الرَّحْمَنِ الرَّحِيمِ

**Course No:** ECGD2204  
**Course Title:** CAD For Civil  
**Date:** 3 / 4 / 2012  
**No. of Questions:** 1  
**Time:** 20 min  
**Using Calculator (Yes)**

**University of Palestine**



**midterm Exam**  
**Second term 2012**  
**Total Grade: 20**

**Instructor:** Eng. Heba Hamad  
**Student No.:** \_\_\_\_\_  
**Student Name:** \_\_\_\_\_  
**College Name:** College of Applied  
Engineering  
**Dep. / Specialist:**  
**Using Dictionary (No)**

---

---