

Course No: ARC4325
Course Title: Urban design
Date:2017/10/23
No. of Questions: (2)
Time: One hour
Using Calculator (No)

University of Palestine



Midterm Exam
2017/2018
Total Grade:10%

Lecturers: Dr. Hazem Abu-Orf
Dr. Mohammed El Mougher

Student No.: _____
Student Name: _____
College Name: _____
Dep. / Specialist: _____
Using Dictionary (No)

الإجابة على ورقة الأسئلة...

Question One: (5 Marks)

Q1A: Briefly define the below concepts: (define only five terms) (2.5 Marks)

Urban fabric:

Public realm:

Urban form:

Firmness, function & delight:

A sense of place

Urban grain

Q1B: Choose only one answer for each statement below (2.5 Marks)

1. The distinctive remarks to open urban structure are:

- A) Visual impact B) Landscape C)A +B D) None of the options

2. The design of urban structure and open space should in their design consider:

- A) Clear relations (inner & outside spaces) B) Pedestrians' circulation and their entry
C) having varied functions of the open space D) all options

3. Scale in urban design is treated differently from architecture discipline and considers:

- A) Height, massing & building type B) Urban grain & urban structure C)street scape and landscape
D) None of the options

4. how a place is weaved together in relation to its surroundings may be termed as:

- A) Urban Typology B) Urban structure C) Urban Design D) Urban Form

5. The criteria that mark the design of parking in residential area include

- A) Safe & friendly B) integration of street circulation C) Entry & vehicle circulation D) all options

Course No: ARC4325
 Course Title: Urban design
 Date:2017/10/23
 No. of Questions: (2)
 Time: One hour
 Using Calculator (No)

University of Palestine



Midterm Exam
 2017/2018
 Total Grade:10%


Lecturers: Dr. Hazem Abu-Orf
 Dr. Mohammed El Mougher

Student No.: _____
 Student Name: _____
 College Name: _____
 Dep. / Specialist: _____
 Using Dictionary (No)

الإجابة على ورقة الأسئلة...


Question Two: 5 Marks

Q2A Describe the below architecture styles as required (2 Marks)



List the **diversity** of this public space

- 1)
- 2)
- 3)
- 4)
- 5)
- 6)



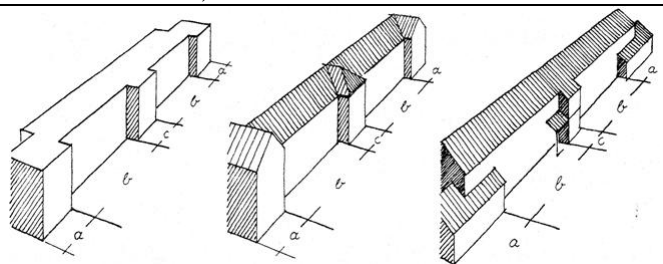
Design is **appropriate**. Why?

- 1)
- 2)
- 3)
- 4)



Is this a **'good'** urban design? Yes/No (circle)

- 1) Diversity:
- 2) Varied functions
- 3) Attracting the eye:



Urban term:

Key characteristics:

- 1)
- 2)
- 3)

Course No: ARC4325
Course Title: Urban design
Date:2017/10/23
No. of Questions: (2)
Time: One hour
Using Calculator (No)

University of Palestine





Midterm Exam
2017/2018
Total Grade:10%

Lecturers: Dr. Hazem Abu-Orf
Dr. Mohammed El Mougher

Student No.: _____
Student Name: _____
College Name: _____
Dep. / Specialist: _____
Using Dictionary (No)

الإجابة على ورقة الأسئلة...

Q 2B Clarify your answer as to why the below figures might be appropriate or inappropriate (3 Marks)	
 <p>Appropriate/Inappropriate (circle) Why: _____ _____ _____ _____</p>	 <p>Appropriate/Inappropriate (circle) Why: _____ _____ _____ _____</p>

End of Questions
Good Luck