

Course No: ARC
 Course Title: Ancient Architecture
 Date:2017/10/26
 No. of Questions: (2)
 Time: One hour
 Using Calculator (No)

University of Palestine



Midterm Exam
 2017/2018
 Total Grade:15%

Lecturer: Dr. Hazem Abu-Orf
 Eng. Zahy El Reis
 Student No.: _____
 Student Name: _____
 College Name: _____
 Dep. / Specialist: _____
 Using Dictionary (No)

الإجابة على ورقة الأسئلة...

Question One: (10 Marks)

Q1 A) Choose the right answer for the below figures (10 Marks)

<p>1)</p>	<p>A) Tomb architecture B) Sun-baked mud-brick or stone structures and consisted of Single elevated platform. C) Very simple in shape with sloping sides & flat roofs without any decoration. D) the construction is a symbol of death, located where the sun sets E) All options</p>
-----------	---

<p>2)</p>	<p>A) Post and lintel construction, with a flat roof made of huge blocks B) a hypostyle hall C) Sun-backed mud brick structure D) Colonnaded courtyard E) Colonnade entrance, or a portico for public worship</p>
-----------	---

<p>3)</p> <p>Plan Section</p>	<p>A) Tomb architecture B) A royal pyramid C) Rock-Hewn Tomb D) Have used limestone as a material for the exterior E) Not of the above options</p>
-------------------------------	--

<p>4)</p>	<p>A) Bent Pyramid at Sneferu B) A royal pyramid C) Step Pyramid of Zosar Saqqara D) Medium Pyramid E) All options</p>
-----------	--

Course No: ARC
 Course Title: Ancient Architecture
 Date:2017/10/26
 No. of Questions: (2)
 Time: One hour
 Using Calculator (No)





University of Palestine



Midterm Exam
 2017/2018
 Total Grade:15%

Lecturer: Dr. Hazem Abu-Orf
 Eng. Zahy El Reis
 Student No.: _____
 Student Name: _____
 College Name: _____
 Dep. / Specialist: _____
 Using Dictionary (No)

الإجابة على ورقة الأسئلة...

<p>5)</p> 	<p>A) Aesthetic aspect of temple construction B) Exterior & interior walls, columns, piers covered with hieroglyphics, pictorial frescoes and carvings C) A + B D) Post and lintel construction E) None of the above options</p>
<p>6)</p> 	<p>A) the 2nd civilization: Sumerian B) Messos = middle, potamos = river C) natural barriers provides for protection D) used limestone as a building material E) all the options</p>
<p>7)</p> 	<p>A) Post and lintel construction, widely spaced columns B) A hypostyle hall C) Colonnade entrance, or a portico for public worship D) Colonnaded courtyard E) all the options</p>
<p>8)</p> 	<p>A) Asymmetrical Temple facade B) Sloping sides with colonnaded entrance C) a portico for public worship D) Entrance is emphasized through symmetry, cornice and being distinct in its wall shape and material E) all the options</p>

Course No: ARC
 Course Title: Ancient Architecture
 Date: 2017/10/26
 No. of Questions: (2)
 Time: One hour
 Using Calculator (No)


University of Palestine

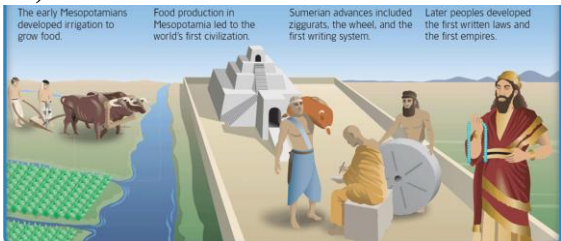


Midterm Exam
 2017/2018
 Total Grade: 15%

Lecturer: Dr. Hazem Abu-Orf
 Eng. Zahy El Reis
 Student No.: _____
 Student Name: _____
 College Name: _____
 Dep. / Specialist: _____
 Using Dictionary (No)

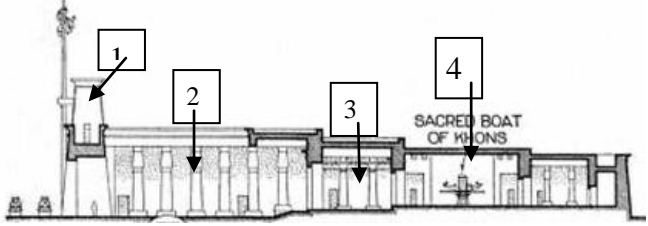
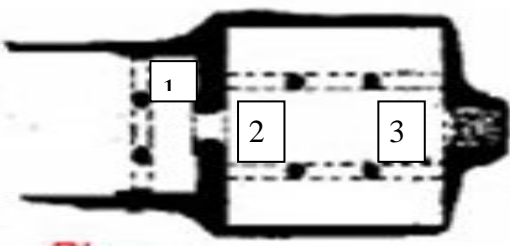
الإجابة على ورقة الأسئلة...

<p>9)</p> 	<p>A) Imhotep's pyramid made for the first time out of stone B) A mastaba C) Step pyramid D) Rock-Hewn Tomb E) None of the options</p>
---	--

<p>10)</p> 	<p>A) Used Limestone as building material B) Sun backed mid brick as building material C) Brick manufacture – sun dried or Kiln-burnt D) Stone as building material E) All the options</p>
---	--

Question Two: 5 Marks

Describe the below drawings as required

 <p>Type of the drawing:</p> <p>1) _____ 2) _____ 3) _____ 4) _____</p>	 <p>Name of tomb: _____</p> <p>1) _____ 2) _____ 3) _____</p>
---	---

Course No: ARC
Course Title: Ancient Architecture
Date:2017/10/26
No. of Questions: (2)
Time: One hour
Using Calculator (No)

University of Palestine



Midterm Exam
2017/2018
Total Grade:15%

Lecturer: Dr. Hazem Abu-Orf
Eng. Zahy El Reis
Student No.: _____
Student Name: _____
College Name: _____
Dep. / Specialist: _____
Using Dictionary (No)

الإجابة على ورقة الأسئلة...

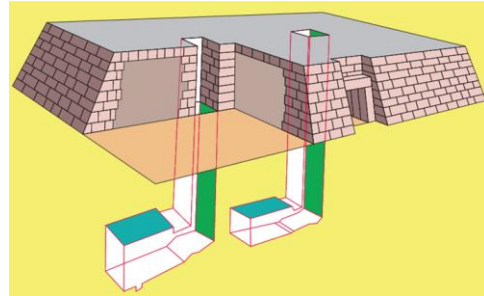


Temple name: _____

Façade design:

- 1) _____
- 2) _____
- 3) _____

Material used: _____



Tomb's Name: _____

Building materials: _____

Façade: _____

Vertical access: _____



Tomb's name: _____

Architecture philosophy: _____

Material used: _____

Form: _____

End of the Questions

Good Luck