

Course No: ARC 4325
Course Title: Urban Design
Date: 18/04/2017
No. of Questions: (2)
Time: 1hour
Using Calculator (No)

University of Palestine



امتحان نصفى ثاني
فصل ثاني 2017
Total Grade:10

Course coordinator: Dr. H. Abu-Orf
Student No.: _____
Student Name: _____
Department: _____
Faculty: _____
Using Dictionary (No)

Question One:5 marks

Q1 A: Choose only one answer for the below sentences: (2 ½ Marks)

1 Urban design criteria include

- a) Taming the car b) Creative lightening c) Walkability d) Designing spaces for play e) all the above

2 A streetscape may well articulated as

- a) A pedestrian friendly system where users have ample access and mobility b) a view or scenes of streets c) creating identity coupled with a sense of place d) the degree of finess and coarseness e) All the above

3 Attached to urban design are

- a) Creative engagement and scale but excluding connectivity b) walkability and sidewalk design but also including creating vibrant spaces c) Visual impact and transparent corners d) Clear relations of various spaces in addition to circulation e) all the above

4 Open urban structure is a mixture of open & block structure which has at its stake

- a) The landscape as a design criterion b) achieving safety while being friendly c) a + b d) Integration & harmony e) all the above

5 Urban pattern may be well understood as

- a) Employing factors that determine density b) the number of habitants c) a grid structure to achieve a balanced, social and economic objectives d) Mixture of building and plots of various sizes e) all the above

Q1 B: Tick either √ or X for the below sentences (2 ½ Marks)

- () Pedestrian design achieves its aims using 'integrated' strategy that involves mobility & accessibility, safety & comfort, but excluding ecology
- () Dead width zone is also known as frontage for sidewalks in shopping areas
- () A curb extension narrows visually and physically the roadway while creating shorter and safer crossings for pedestrians
- () A curb extension may appear in varying forms that include midblock and bus bulbs, however, excluding gateway
- () 'Chokers' do serve as bus stops including cut through for cyclists

Course No: ARC 4325
 Course Title: Urban Design
 Date: 18/04/2017
 No. of Questions: (2)
 Time: 1hour
 Using Calculator (No)

University of Palestine



امتحان نصفى ثاني
 فصل ثاني 2017
 Total Grade:10

Course coordinator: Dr. H. Abu-Orf
 Student No.: _____
 Student Name: _____
 Department: _____
 Faculty: _____
 Using Dictionary (No)

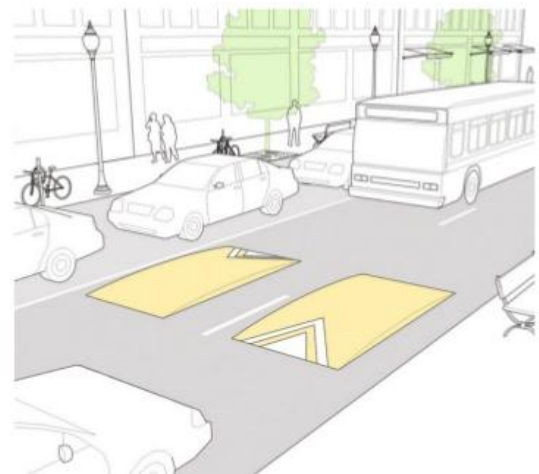
Question Two:5 Marks

Clarify the below figures as required. Only five to answer, the sixth figure is optional (5Marks)



Strategy:

Key characteristics:



Strategy:


Characteristics:



Strategy:

Usefulness:

Characteristics:



Strategy:

Usefulness:

Course No: ARC 4325
 Course Title: Urban Design
 Date: 18/04/2017
 No. of Questions: (2)
 Time: 1hour
 Using Calculator (No)

University of Palestine



امتحان نصفى ثاني
 فصل ثاني 2017
 Total Grade:10

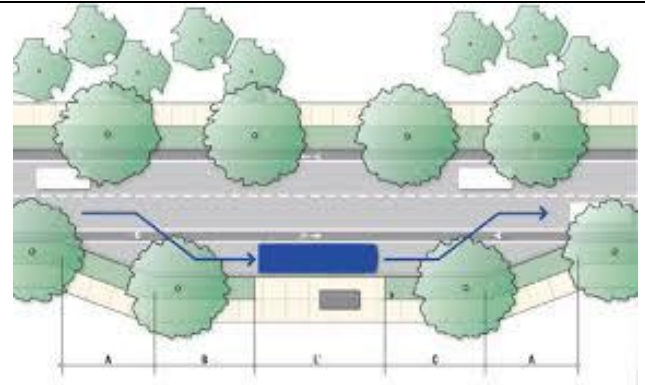
Course coordinatar: Dr. H. Abu-Orf
 Student No.: _____
 Student Name: _____
 Department: _____
 Faculty: _____
 Using Dictionary (No)



Strategy

Usefulness

Characteristics



Strategy

What is wrong in the figure?

Best wishes